

一. ^{zǔ cí} 组词 (至少写三个, 但写得越多越好!)

以: 可以 以前 以后 以为

时: _____

好: _____

开: _____

生: _____

快: _____

二. ^{zào jù} 造句

1. 有趣: _____

2. 一定: _____


3. 刚刚: _____

4. 继续: _____

5. 陌生: _____


Name: _____

Date: _____



Put on Your Thinking Cap!

1. A store records the sales of its toys in the table below.



Month	Number of Toys Sold
January	180
February	90 more than in January
March	3 times as many as in February
April	320 fewer than in March

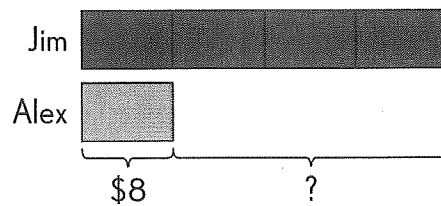
- a. How many toys are sold in February?
- b. How many toys are sold in March?
- c. How many toys are sold in April?
- d. How many toys are sold altogether during the four months?

Name: _____

Date: _____

2. Teresa and Nancy make 135 pins for a fund-raising project. Teresa makes 37 more pins than Nancy. How many pins does Teresa make?

3. Alex and Jim have equal amounts of money. Each day, Alex spends \$5 and Jim spends \$3. When Alex has \$8 left, Jim has 4 times as much money left as Alex. How much money does each boy have at first?



Name: _____

Date: _____

Lesson 10.3 Real-World Problems: Money

Solve. Draw bar models to help you.

1. Mathew pays \$52 for a pair of glasses.
Raja pays \$7.15 more for a different pair of glasses.
How much does Raja pay for his pair of glasses?

2. Mr. Larry buys a tennis racket for \$76.90.
He gives the cashier 2 fifty-dollar bills.
How much change does Mr. Larry receive?

Name: _____


Date: _____

- 3.** Emily saves \$28.60.
Emily's sister saves \$19.80 more than she did.
- a.** How much money does Emily's sister save?
 - b.** How much money do they save in all?

- 4.** Lily has \$17.50.
Zachary has \$24.90.
They want to buy a \$60 present for their mother.
- a.** How much money do they have in all?
 - b.** How much more money must they save if they want to buy the present?

Name: _____

Date: _____

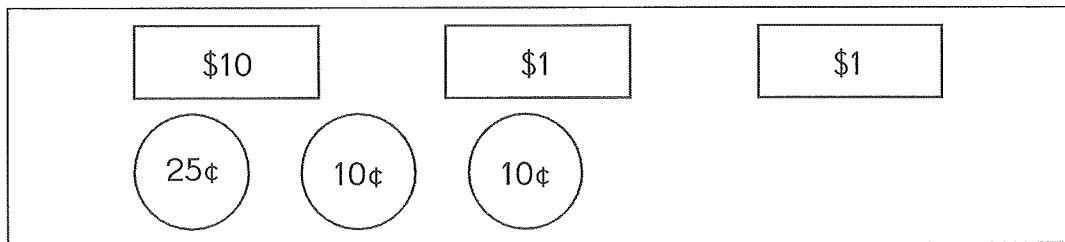


Put on Your Thinking Cap!

Draw the least number of bills and coins to make each amount.

Example

\$12.45



1. \$36.70

2. \$57.35

Name: _____

Date: _____

Solve.

3. Xavier has \$12 less than Calvin.
Amelia has \$18 more than Xavier.
They have a total of \$102 altogether.
How much money does Xavier have?
4. There are 20 coins in a piggy bank.
There are only dimes and quarters in the bank.
The total amount of money in the bank is \$3.80.
How many quarters are in the piggy bank?

Name _____ Date _____

Chinese Reading Log

Date						
I read						
I learn						
Parent's signature						